



Α. Παρατήρησε τις εικόνες με τα σχήματα και κύκλωσε το σωστό κουτάκι.





είναι ισοδύναμα

δεν είναι
ισοδύναμα



είναι ισοδύναμα

δεν είναι
ισοδύναμα





είναι ισοδύναμα

δεν είναι
ισοδύναμα

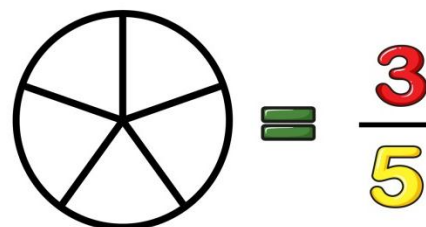
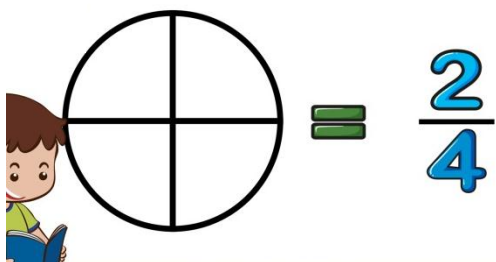
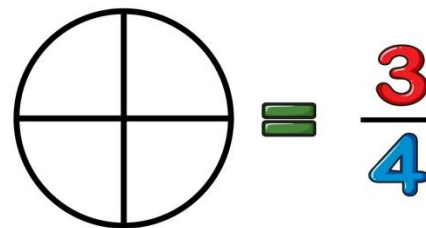

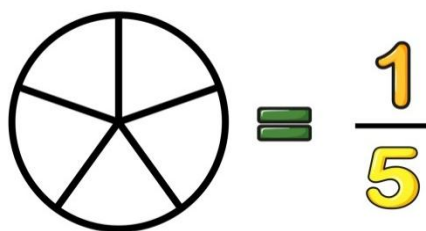
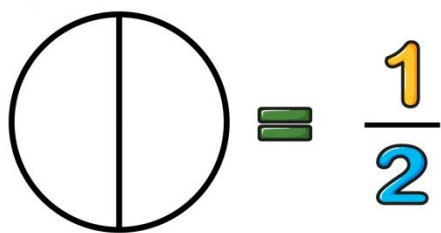


είναι ισοδύναμα

δεν είναι
ισοδύναμα



Β. Χρωμάτισε τα σωστά κομμάτια.



Γ. Πόση είναι η πίτσα που έχει απομείνει; Αντιστοίχισε τα σωστά.



$$\frac{6}{8}$$



$$\frac{1}{4}$$



$$\frac{2}{4}$$



$$\frac{7}{8}$$


Δ. Κύκλωσε το κλάσμα που έχει ζωγραφίσει η δασκάλα στον πίνακα.




$\frac{2}{4}$ $\frac{3}{4}$ $\frac{4}{4}$



$\frac{4}{6}$ $\frac{3}{6}$ $\frac{5}{6}$



$\frac{2}{8}$ $\frac{4}{8}$ $\frac{5}{8}$



$\frac{5}{8}$ $\frac{3}{8}$ $\frac{6}{8}$


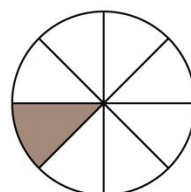

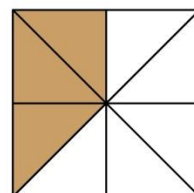
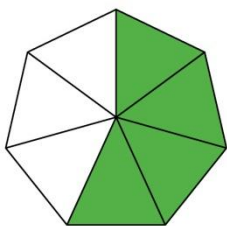
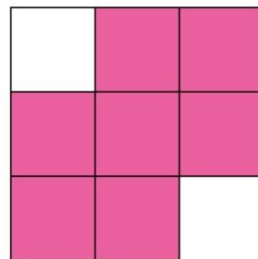
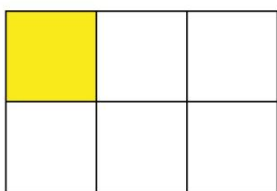


$\frac{1}{3}$ $\frac{2}{3}$ $\frac{3}{3}$

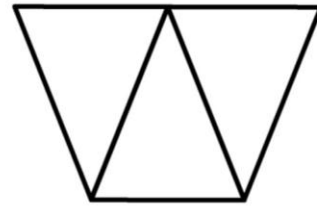
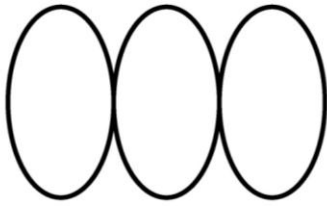

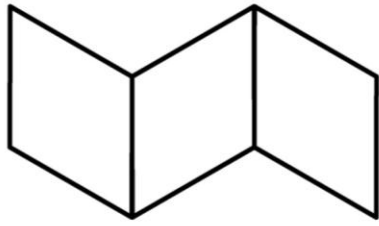


$\frac{1}{4}$ $\frac{2}{4}$ $\frac{3}{4}$

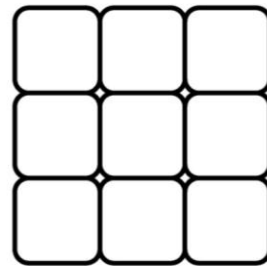
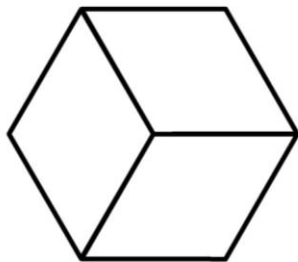

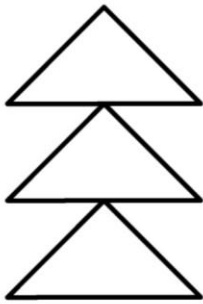
Ε. Γράψε σε κλάσμα την ποσότητα που έχει απομείνει.



Στ. Χρωμάτισε τις κλασματικές μονάδες.



$\frac{1}{3}$



Βαθμολόγησε εσύ πρώτα τον εαυτό σου.



δούλεψα έξυπνα

ήταν εύκολο!

κουράστηκα πολύ

ήταν δύσκολο!