

ΟΝΟΜΑ: .....


ΗΜΕΡΟΜΗΝΙΑ: .....


ΒΑΘΜΟΣ: ..... ΠΑΡΑΤΗΡΗΣΕΙΣ: .....

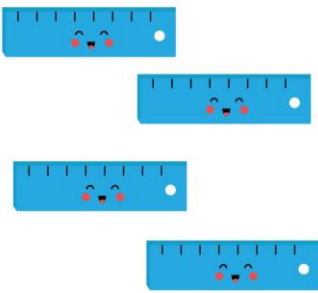
<https://www.i-learn.gr>

**A.** Μέτρησε τα αντικείμενα και κύκλωσε το σωστό αριθμό.

	<b>2</b>
	<b>4</b>
	<b>3</b>
	<b>1</b>

	<b>1</b>
	<b>2</b>
	<b>4</b>
	<b>3</b>


	<b>7</b>
	<b>4</b>
	<b>5</b>
	<b>6</b>

	<b>4</b>
	<b>3</b>
	<b>5</b>
	<b>6</b>

**B.** Μέτρησε τα αντικείμενα και κύκλωσε το σωστό αριθμό.


	<b>1</b>
	<b>4</b>
	<b>3</b>
	<b>5</b>


	<b>4</b>
	<b>5</b>
	<b>3</b>
	<b>2</b>


	<b>1</b>
	<b>3</b>
	<b>4</b>
	<b>2</b>


	<b>5</b>
	<b>4</b>
	<b>6</b>
	<b>7</b>

Γ. Μέτρησε τα αντικείμενα και κύκλωσε το σωστό αριθμό.


	<p><b>1</b></p> <p><b>4</b></p> <p><b>3</b></p> <p><b>2</b></p>
---	---


	<p><b>5</b></p> <p><b>4</b></p> <p><b>6</b></p> <p><b>3</b></p>
--	---


	<p><b>5</b></p> <p><b>4</b></p> <p><b>3</b></p> <p><b>6</b></p>
--	---


	<p><b>4</b></p> <p><b>1</b></p> <p><b>2</b></p> <p><b>3</b></p>
---	---

Δ. Μέτρησε τα αντικείμενα και κύκλωσε το σωστό αριθμό.



	<p><b>4</b></p> <p><b>2</b></p> <p><b>3</b></p> <p><b>5</b></p>
---	---

	<p><b>4</b></p> <p><b>5</b></p> <p><b>6</b></p> <p><b>3</b></p>
--	---

	<p><b>2</b></p> <p><b>5</b></p> <p><b>4</b></p> <p><b>3</b></p>
---	---

	<p><b>3</b></p> <p><b>4</b></p> <p><b>5</b></p> <p><b>6</b></p>
--	---

Ε. Ένωσε τα σωστά.



4

2

1

3

ΣΤ. Ένωσε τα σωστά.



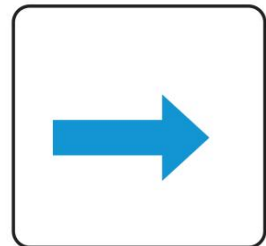







4

2





1

3








**Ζ.** Ένωσε με μια γραμμή αυτά που έχουν την ίδια κατεύθυνση.





**Η.** Ένωσε με μια γραμμή αυτά που έχουν την ίδια κατεύθυνση.





Θ. Γράψε κάτω από κάθε σχήμα την ονομασία του.




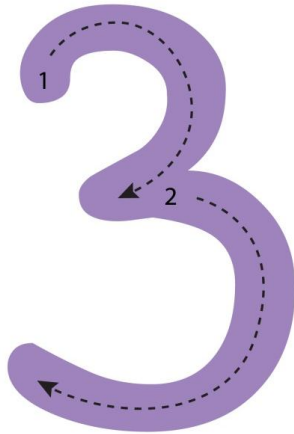
Ια. Γράψε τους αριθμούς.



Ιβ. Γράψε τους αριθμούς.


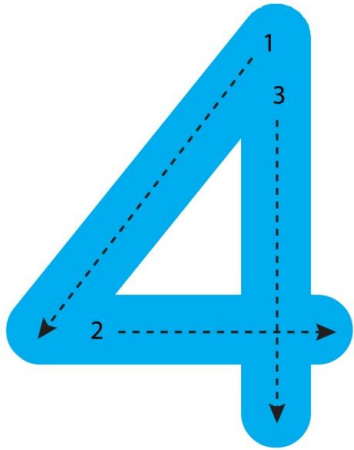


Ιγ. Γράψε τους αριθμούς.


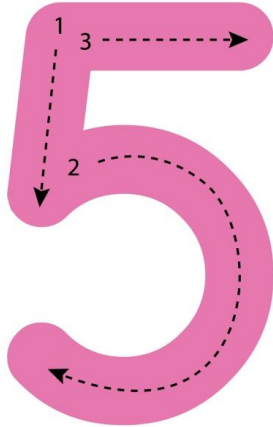




16. Γράψε τους αριθμούς.



Ιε. Γράψε τους αριθμούς.



5 5 5 5 5 5

5 5 5 5 5 5

5 5 5 5 5 5

5 5 5 5 5 5

Κ. ΑΝΤΙΣΤΟΙΧΙΣΕ ΤΑ ΣΩΣΤΑ.



Λ. Αντιστοίχισε τα σωστά.

